

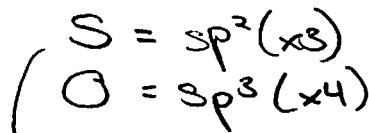
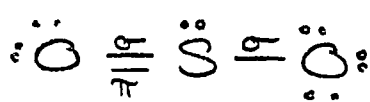
Name: _____

Date: _____

Chemistry: Semester 1

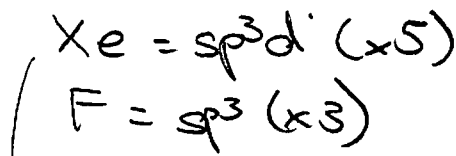
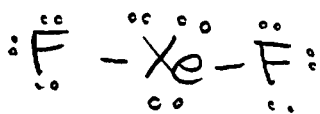
VSEPR Worksheet

SO₂ (6+12=18)



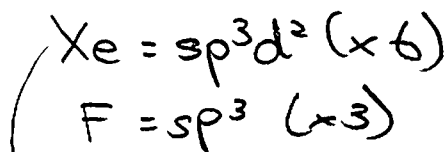
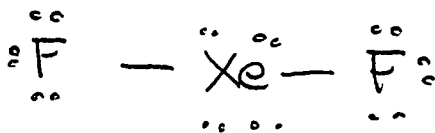
Bent

XeF₂ (8+14 = 22)



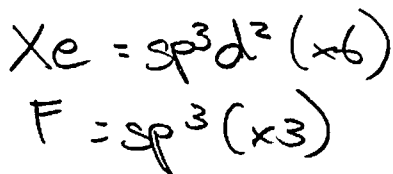
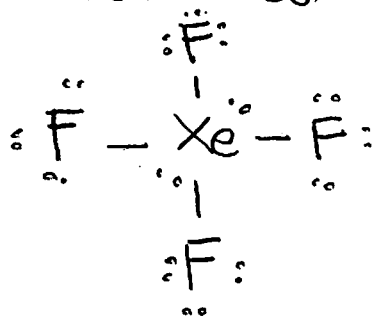
Linear

XeF₂²⁺ (8+14+2 = 22)



Linear

XeF₄ (8+28 = 36)



Square Planar